

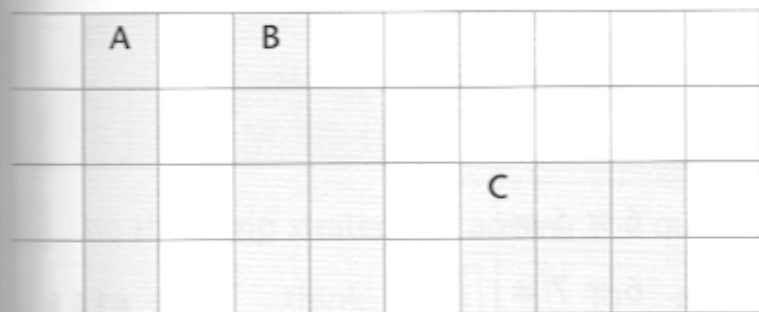
Small areas are measured using **square centimetres**.
The symbol for square centimetres is **cm²**.

Place the tip of your finger inside the square centimetre at the top of the page to see how close it is to a square centimetre.

1 cm



1 cm



8 Each square on the grid paper measures one square centimetre. Which shape has an area of:

- a 6 square centimetres? _____
 b 4 square centimetres? _____
 c 7 square centimetres? _____

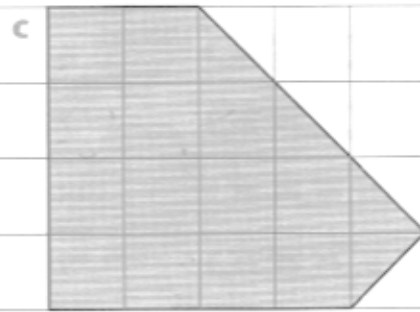
9 Calculate the area of the shapes by counting the square centimetres.




square cm



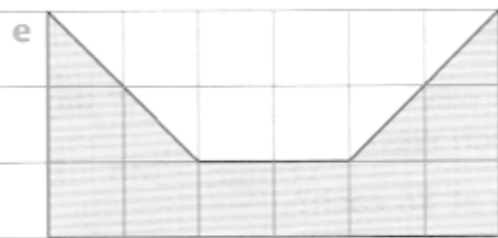
square cm



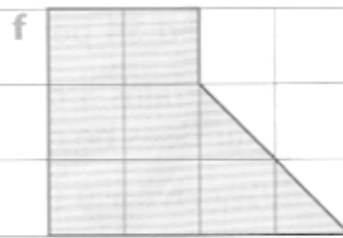
square cm




square cm



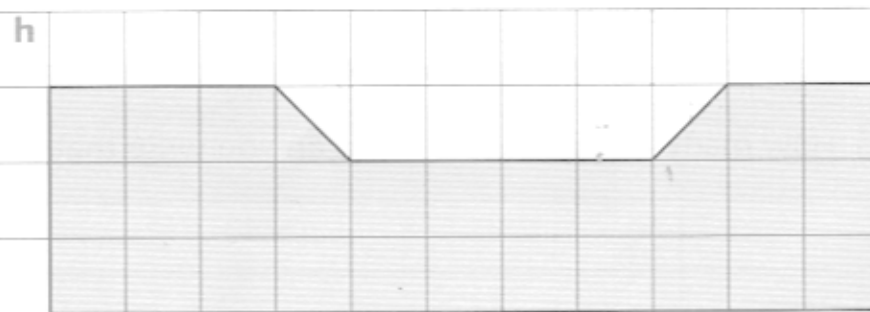
square cm



square cm



square cm



square cm